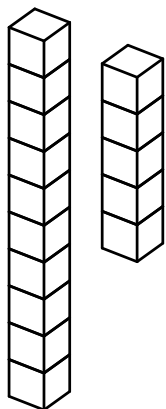


# Counting Base 10 Blocks Worksheet #5-3

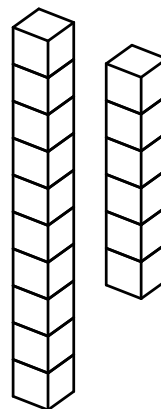
## Solutions

1)



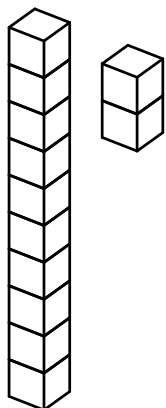
15

2)



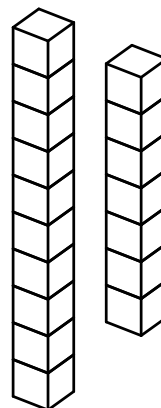
16

3)



12

4)



17