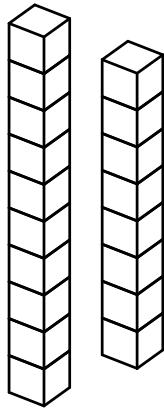


# Counting Base 10 Blocks Worksheet #4-4


## Solutions

1)



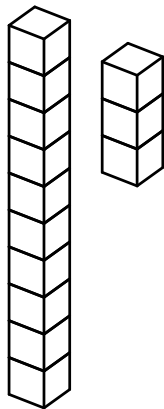
18

2)



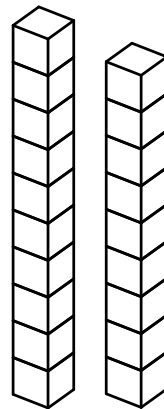
16

3)



13

4)



19