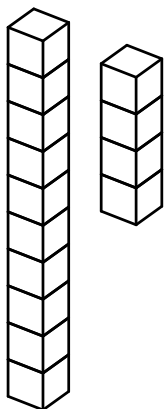


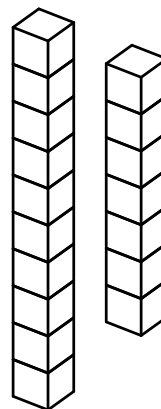
# Counting Base 10 Blocks Worksheet #1-3

Count the blocks by tens and ones and write the answer.

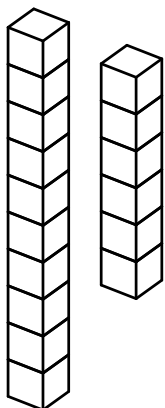
1)



2)



3)



4)

